

Last Name: _____

First Name: _____

Physics 102 Spring 2005: Test 2—Free Response and Instructions

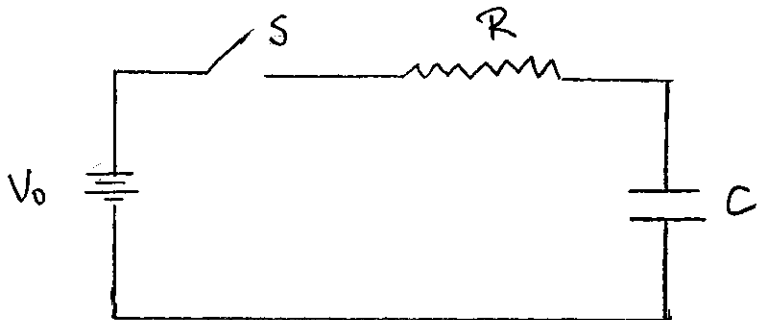
- Print your LAST and FIRST name on the front of your blue book, on this question sheet, the multiple-choice question sheet and the multiple-choice answer sheet.
- TIME ALLOWED 90 MINUTES
- The test consists of two free-response questions and 15 multiple-choice questions.
- The test is graded on a scale of 100 points; the free-response questions are worth a total of 70 points, and the multiple-choice questions account for 30 points.
- Answer the two free-response questions in your blue book. Answer the multiple-choice questions by marking a dark X in the appropriate column and row in the table on the multiple-choice answer sheet.
- Consult no books or notes of any kind. You may use a hand-held calculator in non-graphing, non-programmed mode.
- Do NOT take test materials outside of the class at any time. Return this question sheet along with your blue book and multiple-choice question sheet.
- Write and sign the Pledge on the front of your blue book.

Show your work for the free-response problems, including neat and clearly labeled figures, in your blue book.

Answers without explanation (even correct answers) will not be given credit.

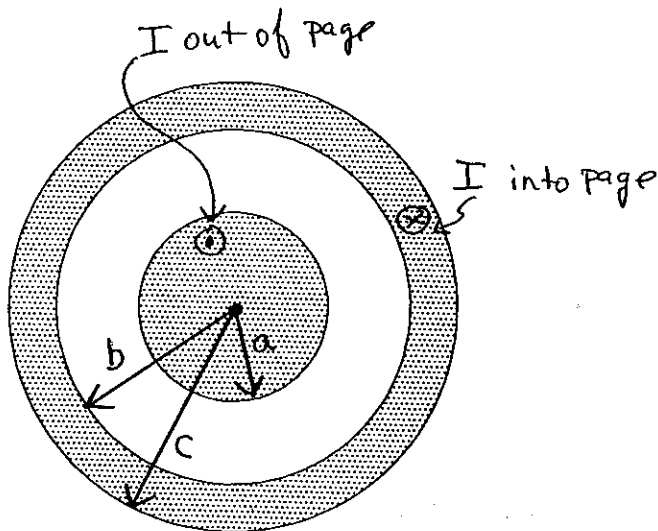
I. (35 pts) The sketch below shows a simple RC circuit. A battery V_0 is connected in series to a resistor R and capacitor C through a switch S . The capacitor is initially uncharged, and at $t = 0$ the switch S is closed. Express your answers in terms of V_0 , R , and C .

- 5 (a) Determine $I(t)$, the current through R as a function of time. Sketch $I(t)$ vs t .
- 5 (b) Determine $Q(t)$, the charge on C as a function of time. Sketch $Q(t)$ vs. t .
- 5 (c) Determine $P_V(t)$, the power delivered by the battery as a function of time. Integrate $P_V(t)$ from $t = 0$ to $t = \infty$ to determine the total energy delivered by the battery as the capacitor charges.
- 5 (d) Determine $P_R(t)$, the power dissipated in the resistor as a function of time. Integrate $P_R(t)$ from $t = 0$ to $t = \infty$ to determine the total energy dissipated in the resistor as the capacitor charges. If the value of R is doubled, how does the total energy dissipated in the resistor change?
- 4 (e) Determine the total energy stored in the capacitor at $t = \infty$.
- 5 (f) Compare your answers for energies in (c), (d), and (e). Are the results as expected?



II.(35 pts) The figure below shows the cross section of a long conductor of a type called a coaxial cable. The radius of the inner solid cylinder is a , and the outer cylindrical shell has inner radius b and outer radius c , as shown in the figure below. The conductors carry equal but opposite currents I , with the current in the inner conductor flowing out of the page. The currents are uniformly distributed over the cross-sectional area in each case. The coordinate r measures the distance from the axis of the cylinders. Express your answers in terms of I , a , b , c and possibly other constants.

- 7(a) Determine the magnitude of the current density $|\vec{J}_{inner}|$ in the region $r < a$. Determine the magnitude of the current density $|\vec{J}_{outer}|$ in the region $b < r < c$.
- 8(b) Determine the magnetic field $\vec{B}(r)$ in the range $r < a$, being sure to indicate the direction of \vec{B} .
- 9(c) Determine $\vec{B}(r)$ in the region $a < r < b$.
- 8(d) Determine $\vec{B}(r)$ in the region $b < r < c$.
- 5(e) Determine $\vec{B}(r)$ in the region $r > c$.



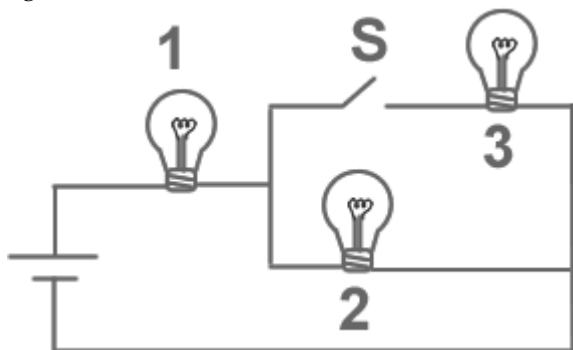
PHYSICS 102 EXAM #2 --- MULTIPLE CHOICE

Name _____

March 31, 2005

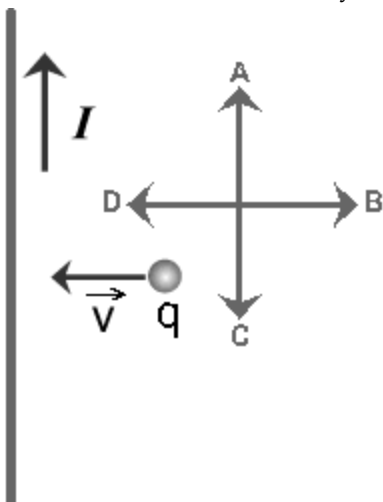
Choose the one alternative that best completes the statement or answers the question.

- 1) The figure below shows 3 identical lightbulbs connected to a battery. What happens to the brightness of lightbulb 1 when the switch S is closed?

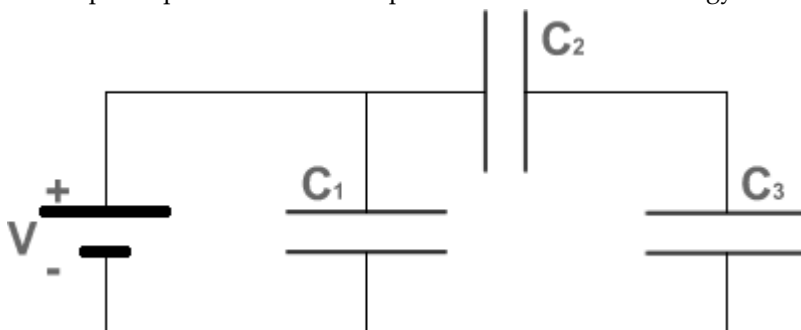


- A) The brightness increases
B) The brightness remains the same as before the switch is closed
C) The brightness will decrease momentarily then return to its previous level
D) The brightness will increase momentarily then return to its previous level
E) The brightness decreases
- 2) A capacitor of capacitance C is made of two cylinders of radii a , and b ($b > a$) carrying a linear charge density λ . What is the capacitance of a cylindrical capacitor with the same charge density λ , and cylinders of radii $2b$ and $2a$?
- A) $2C$ B) $C/4$ C) $C/2$ D) $4C$ E) C
- 3) A charged particle is moving with speed v perpendicular to a uniform magnetic field. A second identical charged particle is moving with speed $2v$ perpendicular to the same magnetic field. The frequency of revolution of the first particle is f . The frequency of revolution of the second particle is
- A) $f/4$. B) $2f$. C) $f/2$. D) f . E) $4f$.

- 4) The figure below shows a small positive charge q moving toward a long current-carrying wire. Which of the arrows labeled A to D correctly represents the direction of the magnetic force applied on the charge?

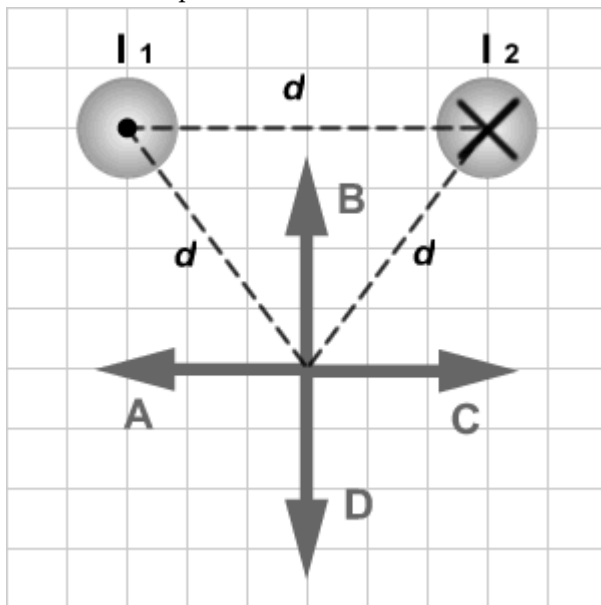


- A) D
 B) B
 C) The force points in a direction perpendicular to the plane of the figure
 D) A
 E) C
- 5) Three capacitors C_1 , C_2 , and C_3 are connected to a battery as shown in the figure below. The three capacitors have equal capacitances. Which capacitor stores the most energy?

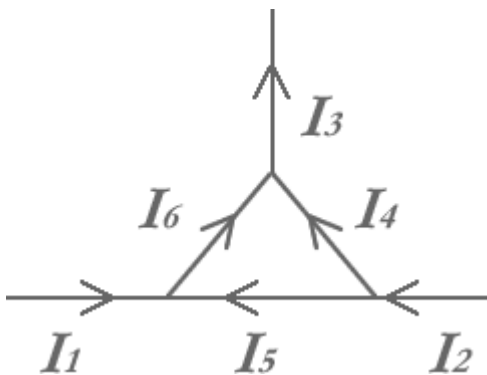


- A) C_2 or C_3 . They store the same amount of energy
 B) C_2
 C) C_1
 D) All three capacitors store the same amount of energy
 E) C_3
- 6) A parallel-plate capacitor of capacitance C is connected to a battery of voltage V until it is fully charged. The energy density in the capacitor is then equal to u . If the same capacitor is then connected to a battery of voltage $2V$ its energy density becomes equal to
- A) $u/4$. B) $4u$. C) $2u$. D) u . E) $u/2$.

- 7) The figure below shows two long wires carrying equal currents I_1 and I_2 flowing in opposite directions. Which of the arrows labeled A to D correctly represents the direction of the magnetic field due to the wires at a point located at an equal distance d from each wire?

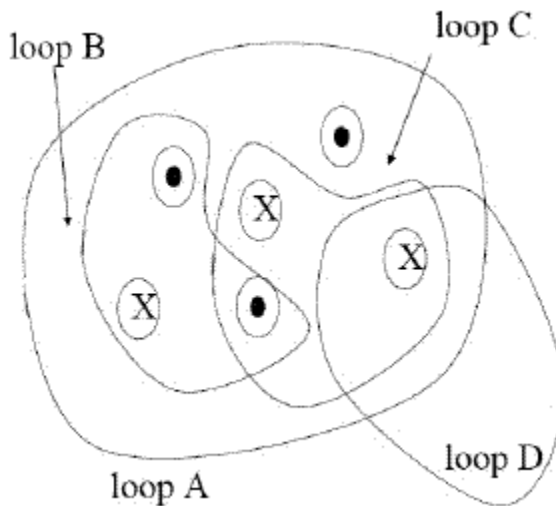


- A) B
 B) D
 C) A
 D) The magnetic field is equal to zero at that point
 E) C
- 8) The figure below shows a junction with currents labeled I_1 to I_6 . Which of the following statements is correct?



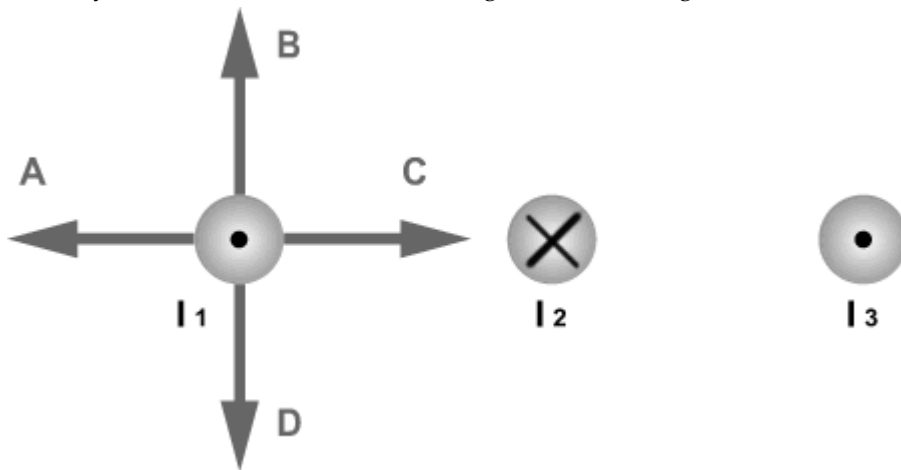
- A) $I_6 + I_5 = I_1$
 B) $I_1 + I_2 = I_6 + I_4$
 C) $I_4 + I_3 = I_6$
 D) $I_2 = I_6 + I_4$
 E) $I_1 + I_3 = I_6 + I_4$

9) Consider six wires coming into or out of the page, all with the same current. Rank the line integral of the magnetic field (from greatest to least) taken counterclockwise around each loop shown.



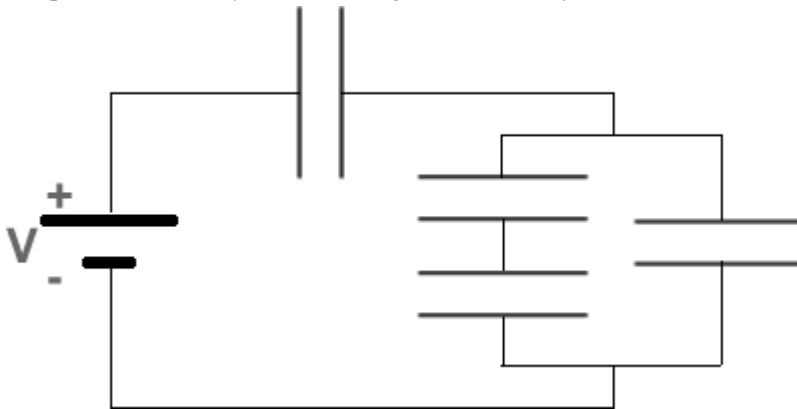
- A) $B > C > D > A$
- B) $B > C = D > A$
- C) $B > A > C = D$
- D) $C > B = D > A$
- E) $C > A > B = D$

10) The figure below shows 3 long, parallel current-carrying wires. The magnitudes of the currents are equal and their directions are indicated in the figure. Which of the arrows drawn near the wire carrying current 1 correctly indicates the direction of the magnetic force acting on that wire?



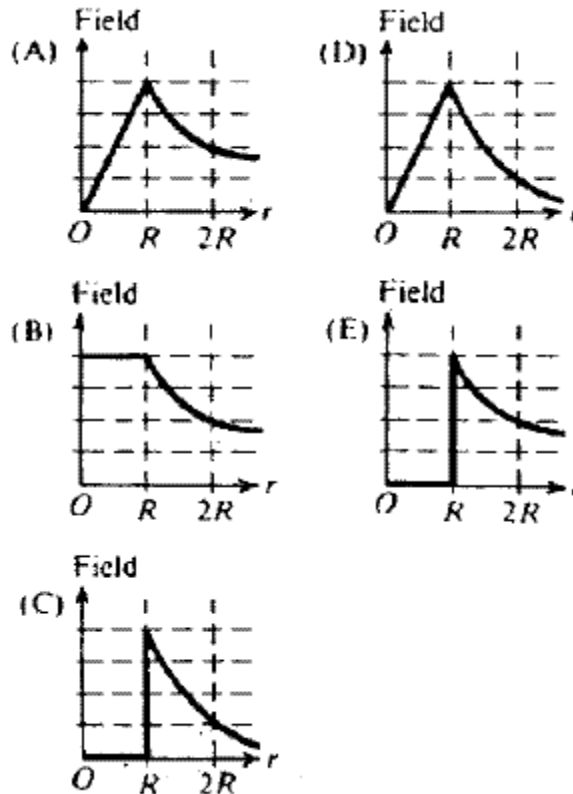
- A) D
- B) A
- C) The magnetic force is equal to zero
- D) B
- E) C

11) What is the equivalent capacitance of the capacitor network shown in the figure below? (All the capacitors have a capacitance $C = 5 \mu\text{F}$. The voltage of the battery is $V = 6\text{V}$.)



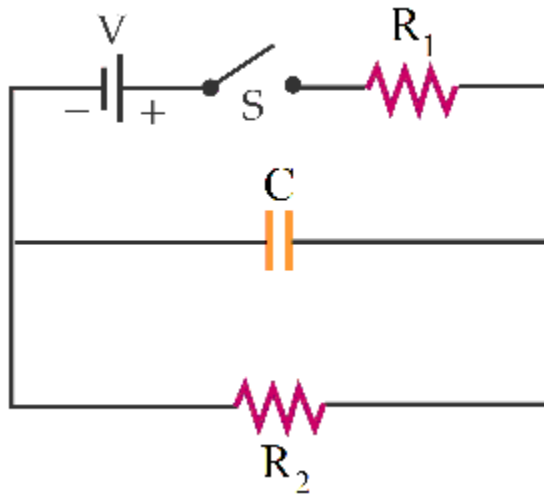
- A) $1 \mu\text{F}$ B) $20 \mu\text{F}$ C) $3 \mu\text{F}$ D) $5 \mu\text{F}$ E) $10 \mu\text{F}$

12) A wire of radius R carries a current I uniformly distributed throughout its interior. Which plot below best represents the magnitude of the magnetic field as a function of r , the distance from the center of the wire?



- A) A B) B C) C D) D E) E

For questions 13 – 15, refer to the circuit below.



13) What is the current through R_2 as $t \rightarrow \infty$?

- A) $\frac{V}{R_1+R_2}$ B) $\frac{V}{R_1}$ C) $\frac{V}{R_2}$ D) 0 E) ∞

14) What is the current through C at $t = 0$?

- A) $\frac{V}{R_1+R_2}$ B) $\frac{V}{R_2}$ C) $\frac{V}{R_1}$ D) 0 E) ∞

15) What is the charge on the capacitor as $t \rightarrow \infty$?

- A) $V C$
B) $(\frac{V}{R_1} R_2)C$
C) $(\frac{V}{R_2} R_1)C$
D) $(\frac{V}{R_1+R_2} R_2)C$
E) 0

Last Name: _____ First Name: _____

Physics 102 Spring 2005: Test 2—Multiple-Choice Answers

	A	B	C	D	E
1					
2					
3					
4					
5					
6					
7					
8					
9					
10					
11					
12					
13					
14					
15					